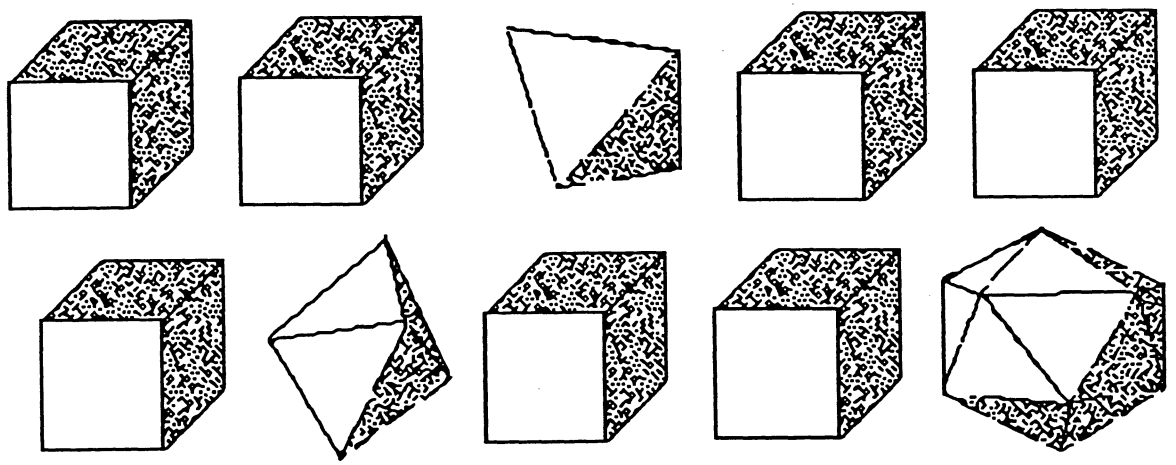


★ 1. \_\_\_\_\_  
(FIRST NAME) (LAST NAME)

★★ 2. Fill in the numbers between 10 and 20.

10    \_\_\_\_\_    \_\_\_\_\_    \_\_\_\_\_    \_\_\_\_\_  
\_\_\_\_\_    \_\_\_\_\_    \_\_\_\_\_    \_\_\_\_\_    \_\_\_\_\_ 20

★ 3. How many cubes are there? \_\_\_\_\_




★★ 4. How much is:

$$\begin{array}{r} 100 \\ +100 \\ \hline \end{array}$$

\_\_\_\_\_

★★★ 5. Draw a house using:

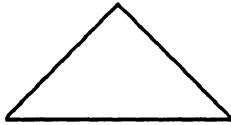
1 big square



1 rectangle




1 triangle



2 small squares



★★★★ 6. Use pennies to measure this rectangle.



How many pennies wide (↓) is it? \_\_\_\_\_

How many pennies long (→) is it? \_\_\_\_\_

(Parents: Reading the problem to your child is ALWAYS okay. If you help them solve the problems, please initial the problem and they will receive partial credit.)