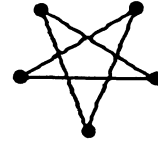
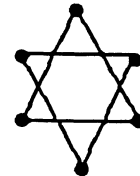


★★ 2. How many points are
on this star? _____



How many points are
on this star? _____



★ 3. Color the star above that has more
points.

★★★★ 4.

○	○	○	○	○	○				
★	★								
□	□	□	□	□	□	□			

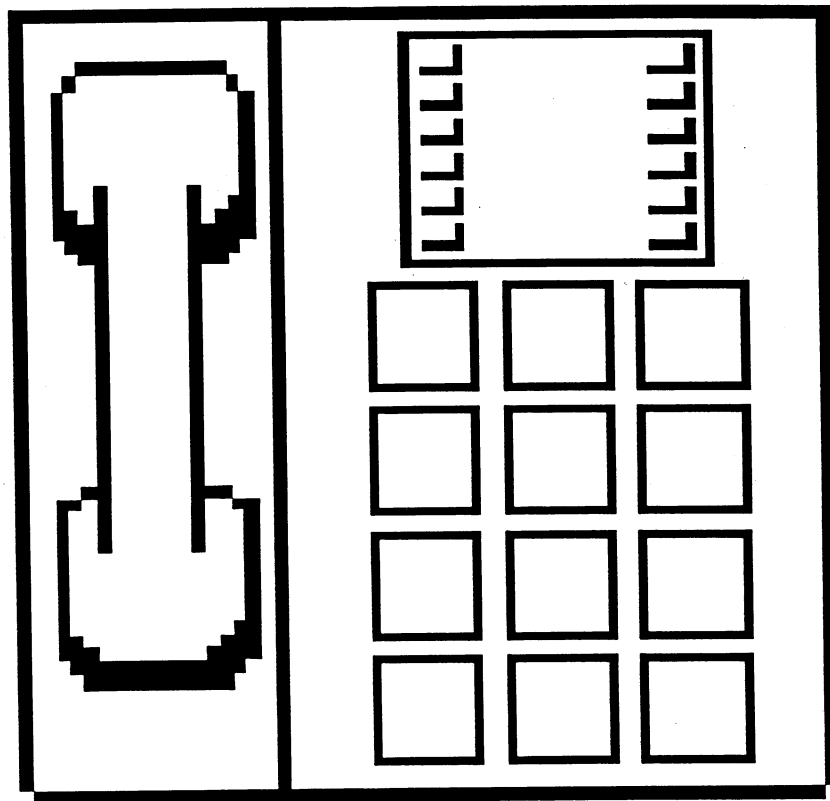
How many circles (○) are there? _____

How many squares (□) are there? _____

How many stars (★) are there? _____

Put a ✓ for each year old you are, in
the bottom row.

★★★ 5. Look at a telephone. Put numbers on the buttons below.



★★ 6. Draw a line from the problem to the correct answer.

5 4 3

$\begin{matrix} \bullet & + & \bullet \\ \bullet & & \bullet \end{matrix} = ?$

 $\begin{matrix} \bullet & + & \bullet \\ \bullet & & \bullet \end{matrix} = ?$

$\begin{matrix} \bullet & + & \bullet \\ \bullet & & \bullet \end{matrix} = ?$

(Parents: Reading the problem to your child is ALWAYS okay. If you help them solve the problems, please initial the problem and they will receive partial credit.)