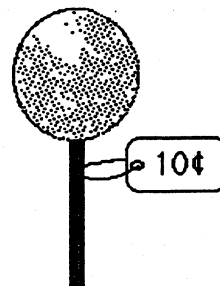


- ★★ 1. How much change should you get if you paid with a quarter?

Answer: _____



- ★★★ 2. It takes 6 kitten steps to walk to the first bowl. It takes 4 steps to walk from one bowl to the next bowl. How many steps does it take for kitty to walk from where he is to bowl 5?



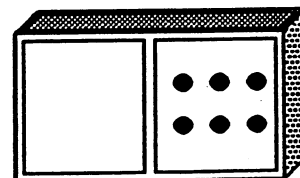
Answer: _____ kitten steps

- ★ 3. Jessica is in line. Three girls are in front of her. 5 girls are in back of her. How many girls are in the line?




_____ girls

- ★ 4. Make the domino a double. Write an addition sentence for the double domino.




Answer: _____ + _____ = _____

- ★★ 5. About how many paper clips would it take to measure the length of the watch?



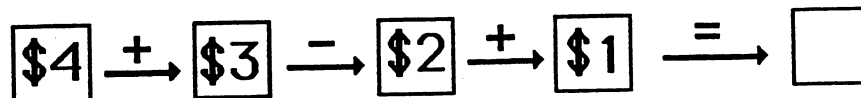
Answer: _____ paper clips

- ★ 6. Use mental math.
24 children are on the bus.
3 more got on.
2 got off.
1 more got on.
How many children are on the bus now?



Answer: _____ children

- ★★ 7. Do each step in the flowchart. Write your answer in the empty box.



- ★★★ 8. Find the number that goes in the first step of the flowchart. Write it in the empty box.

